


Cumulative Review

Concepts and Skills

Fill in the blanks.

Write *heavier than*, *lighter than*, or *as heavy as*.



1. The book is _____ the ball.
2. The doll is _____ the book.
3. The ball is _____ the doll.

Fill in the blanks.



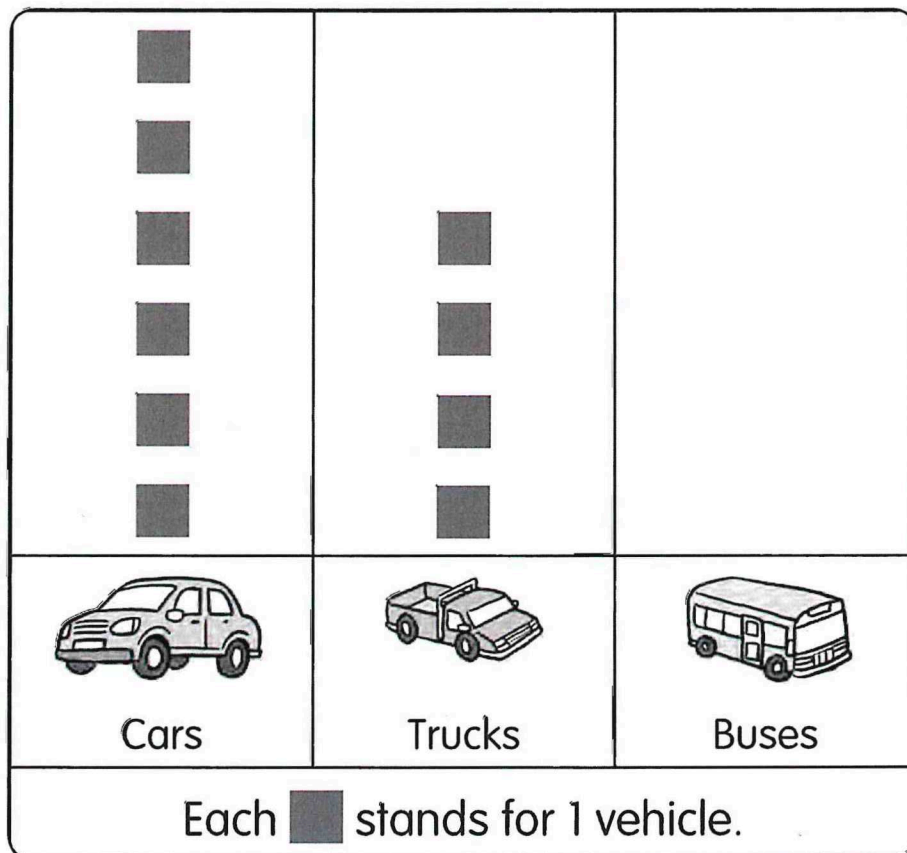
The _____ is lighter than the carrot.

The _____ is heavier than the carrot.


So, the tomato is lighter than the pineapple.

The picture graph shows the number of cars and trucks in a parking lot.

Vehicles in a Parking Lot



Fill in the blanks.






5. There are _____ more cars than trucks.
6. There are _____ cars and trucks in all.
7. There are 2 fewer buses than cars.
Draw  to show the number of buses.
8. Some cars leave the parking lot.
The number of cars and trucks are now the same.
_____ cars leave the parking lot.

Name: _____

Date: _____

Complete the tally chart using the data from the picture graph.

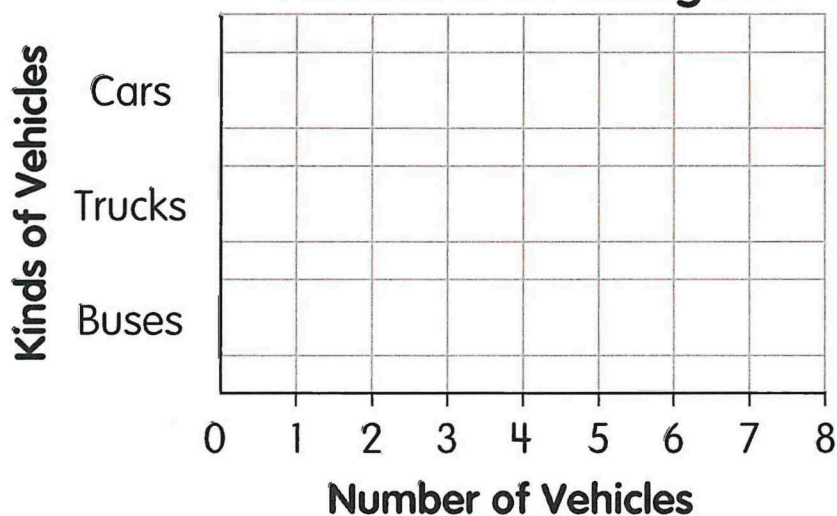
9.

Kinds of Vehicles	Tally	Number
 Cars		
 Trucks		
 Buses		

Make a bar graph using the data from the tally chart.

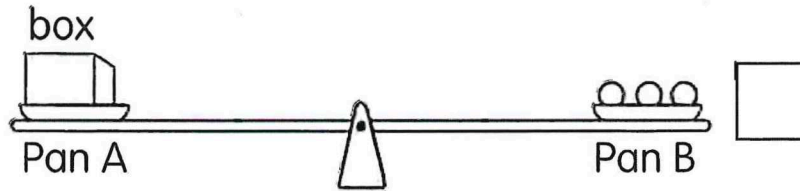
10.

Vehicles in a Parking Lot



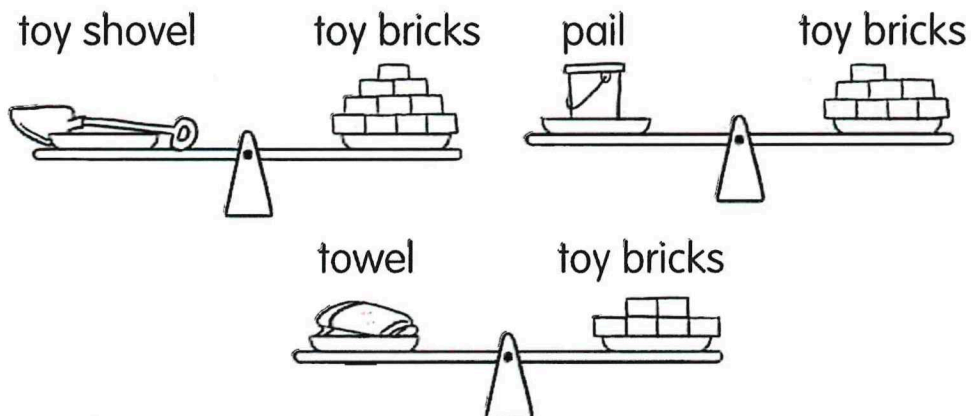
Fill in the blanks.

1 ○ stands for 1 unit.



11. The weight of the box is _____ units.
12. Add 1 marble to Pan A.
Draw ↓ or ↑ in the ☐ to show if Pan B goes up or down.

Fill in the blanks.



13. The weight of the toy shovel is about _____ toy bricks.
14. Order the objects from heaviest to lightest.

_____ _____ _____
heaviest

Name: _____

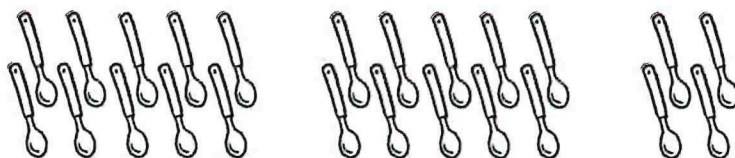
Date: _____

First make tens.

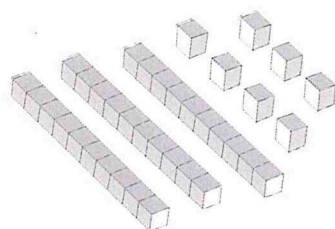
Then count on.

Fill in the missing numbers.

15.



16.



Write the number.

17. twenty-five _____

18. thirty _____

Write the number in words.

19. 37 _____

20. 40 _____

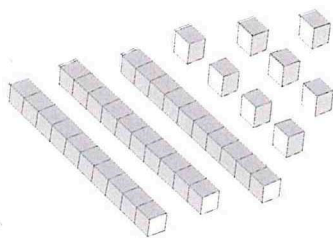
Fill in the missing numbers.

21. $7 + 20 =$ _____

22. _____ $+ 10 = 36$

Find the missing numbers.

23.



38 = _____ tens _____ ones

Look at the place-value chart.

Write the number it shows.

24.

Tens	Ones

25.

Tens	Ones

Name: _____

Date: _____

Circle the greater number.

26. 25 or 17

27. 26 or 29

Circle the number that is less.

28. 10 or 29

29. 38 or 33

Compare the numbers.

Then fill in the blanks.

16

9

21

35

30. _____ is the least.

31. _____ is the greatest.

32. _____ is less than 35 but greater than 16.

33. Order the numbers from the least to greatest.

_____, _____, _____, _____
least

Complete each number pattern.

34. 17, 20, 23, _____, _____, 32

35. 28, _____, 36, 40

Fill in the blanks.

36. 2 less than 25 is _____.

37. _____ is 3 more than 18.

38. $24 =$ _____ tens 4 ones

39. $18 = 1$ ten _____ ones

Add or subtract.

40. $21 + 7 =$ _____

41. $24 + 10 =$ _____

42. $27 - 3 =$ _____

43. $38 - 15 =$ _____

44. $6 + 3 + 7 =$ _____

45. $9 + 8 + 5 =$ _____

Name: _____

Date: _____

$$\begin{array}{r} 46. \quad \quad 2 \ 3 \\ + \quad 1 \ 6 \\ \hline \end{array}$$

$$\begin{array}{r} 47. \quad \quad 2 \ 9 \\ + \quad 1 \ 1 \\ \hline \end{array}$$

$$\begin{array}{r} 48. \quad \quad 1 \ 4 \\ + \quad 1 \ 7 \\ \hline \end{array}$$

$$\begin{array}{r} 49. \quad \quad 1 \ 8 \\ + \quad 1 \ 7 \\ \hline \end{array}$$

$$\begin{array}{r} 50. \quad \quad 3 \ 6 \\ - \quad 2 \ 4 \\ \hline \end{array}$$

$$\begin{array}{r} 51. \quad \quad 3 \ 6 \\ - \quad 1 \ 8 \\ \hline \end{array}$$

$$\begin{array}{r} 52. \quad \quad 2 \ 1 \\ - \quad 1 \ 7 \\ \hline \end{array}$$

$$\begin{array}{r} 53. \quad \quad 3 \ 2 \\ - \quad 1 \ 5 \\ \hline \end{array}$$

Problem Solving

Solve.

- 54.** Jamal has 20 stamps.
Michelle has 4 fewer stamps than Jamal.
How many stamps does Michelle have?

Michelle has _____ stamps.

- 55.** Nate blows up 30 balloons for his birthday party.
Nate blows up 6 fewer balloons than Miguel.
How many balloons does Miguel blow up?

Miguel blows up _____ balloons.

- 56.** Rose buys 3 sets of hairclips.
The first set has 3 pink hairclips.
The second set has 8 blue hairclips.
The third set has 4 white hairclips.
How many hairclips are there in all?

There are _____ hairclips in all.